


**1**      6 8 9  
      + 3 5  
      \_\_\_\_\_  
      \_\_\_\_\_


**2**      Calculate  
      36 ÷ 9

**3**      What fraction of this shape is shaded?




**4**      What number is 60 less than 450?

**5**      Today is National Cheese Pizza Day.  
      If this pizza is to be shared equally between 2 people, how many slices do they each get?




**6**      How many 20p's are there in £4.80?




**7**      Write these numbers in order from the smallest to the biggest;  
      777, 70, 707, 7


**8**      Today is International Literacy Day.  
      In the English alphabet, how many MORE consonants are there than vowels?



**9**      How many days are there in April?




**10**      Write the number 1001 in words




**11**      8 5 7  
      - 4 8 9  
      \_\_\_\_\_  
      \_\_\_\_\_


**12**      Today is National Computer Games Day.  
      Scott plays his console for 10 minutes per day during the month of September. How many hours is this altogether?




**13**      Write the time shown here in words




**14**      In the number 420 379 what does the 7 stand for?

**15**      What is the value of the missing number represented by the shape below?  
      10 -  = 4


**16**      Today is National Play Doh Day.  
      What 3D shape is this tin of Play Doh?




**17**      A loaf of bread is cut into 21 slices and it takes 2 slices to make a sandwich. How many full sandwiches can be made from one loaf?



**18**      Today is National Cheeseburger.  
      How many burgers are needed to make a dozen double cheeseburgers?





**19**      Today is National Talk like a Pirate Day.  
      What is the most common letter in the sentence "Ahoy, Me Hearties!"?




**20**      5 8  
      × 7  
      \_\_\_\_\_  
      \_\_\_\_\_

**21**      If today is Tuesday, what day is it in 9 days time?




**22**      What symbol should go in place of the star to make this calculation correct?  
      8  6 = 2

**23**      Write the following in 24 hour time...




**24**      3 4 4 1

**25**      Today is National Comic Book Day.  
      Superman first appeared in a comic in 1938. How many years ago was this?




**26**      Write the 26<sup>th</sup> of September 1967 as numbers only.



**27**      Write the next two numbers this sequence.  
      12, 20, 28, 36, ...

**28**      Today is National Ask a Stupid Question Day.  
      How many days are there in Julember?



**29**      Which is bigger?  
      98 - 74 or 25 ÷ 5  
      Give a reason for your answer!

**30**      Is this statement true or false?  
      0.8 > 0.08